



Exercice 1: dictée de nombres :



Exercice 2: complète

1	2	5	8
---	---	-----	-----	---	-----	-----	---	-----	-----

Exercice 3: complète avec < ou >

8 ... 3

10 ... 8

2 ... 5

7 ... 11

16 ... 12

6 ... 7

Exercice 4: calcule

$2 + 1 = \dots$

$4 + 5 = \dots$


$7 + 2 = \dots$

$4 + 3 = \dots$

$4 + 4 = \dots$

$5 + 2 = \dots$

Exercice 5 : compte le nombre de cœurs



...